

Time to the Half Hour and Quarter Hour


Time can be measured in half hours and quarter hours.

30 minutes = 1 half hour

15 minutes = 1 quarter hour

The hours of a day are divided into A.M. and P.M. hours. A.M. hours begin at 12 midnight and end at 12 noon. P.M. hours begin at 12 noon and end at 12 midnight.

The clocks show the times of three events that happen every day at an elementary school.



What you write: 9:30

12:15


Here are different ways to say each time.


9:30 **nine thirty** or **half past nine**

12:15 **twelve fifteen** or **fifteen minutes after twelve** or **quarter after twelve**

1:45 **one forty-five** or **fifteen minutes to two** or **quarter to two**

Write the time shown on each clock in two ways.

1.  _____

2.  _____
