


Name _____



Looking Back


NUMBER GRIDS

Here is another way to show addition patterns. Write the missing numbers.

Sum 11	
0	11
1	
2	
3	
	7
5	6
6	5
7	
8	
	2
10	
	0

Sum 12	
0	12
1	11
2	10
3	
4	
	7
	6
7	
8	
9	
	2
11	
12	

Sum 13	
0	13
	12
2	
	10
4	
5	
6	
	6
8	
9	4
	3
11	
12	1
	0



Looking Back

NUMBERS ON THE WALL

Write the numbers that come just after these numbers.


- 1. 88 **89** 41 16
- 2. 50 62 99

Write the numbers that come just before these numbers.

- 3. **27** 28 _____ 71 _____ 39
- 4. _____ 46 _____ 55 _____ 92

Write the numbers that come between these numbers.

- 5. 68 **69** 70 33 35 21 23
- 6. 56 58 89 91 60 62



Day Trip Four

MATCH UP! FOR 98

Here are parts of number boards.
Write the missing numbers.

1.

1	2	3	4
		13	14
21	22		
31			34

2.

26		28		
		38	39	
46		48	49	
	57			
	67			


3.

44	45			
54	55		57	
64	65		67	
		76	77	
			87	

4.

56				
				100

Name _____



Setting Out

FIRST, SECOND, THIRD

Put the numbers in order from least to greatest.

1.

24	9	12
----	---	----

9	12	24
---	----	----

2.

17	31	10
----	----	----

--	--	--

3.

53	19	12
----	----	----

--	--	--

4.

26	39	22
----	----	----

--	--	--

5.

35	30	38
----	----	----

--	--	--

6.

98	73	80
----	----	----

--	--	--