

Name: _____ Teacher: _____

AP Physics 1 Summer Work: Vectors

Use the notes and information found at: <http://tinyurl.com/ph4a8ty> to complete this assignment.

1. Find the X Y component form of the following vectors:
 - a. 35 m/s at 57° N of E

 - b. 12 m at 34° S of W

 - c. 8 m/s due South

 - d. 20m/s 5° E of S

 - e. 17m at 35° W of S

2. Find the magnitude and direction form of the following vectors:
 - a. $5.7_x + 3.4_y$

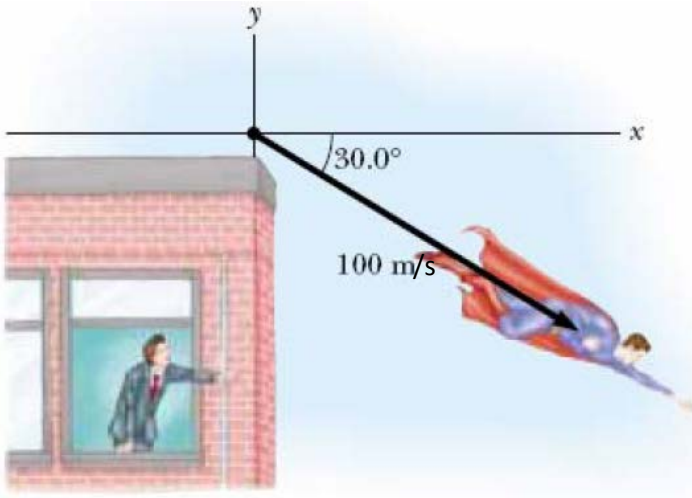
 - b. $-10_x + -3_y$

 - c. $12_x + -20_y$


 - d. $-30_x + 27_y$

 - e. $-13_x + 9_y$

3. What is Superman's velocity in component form?

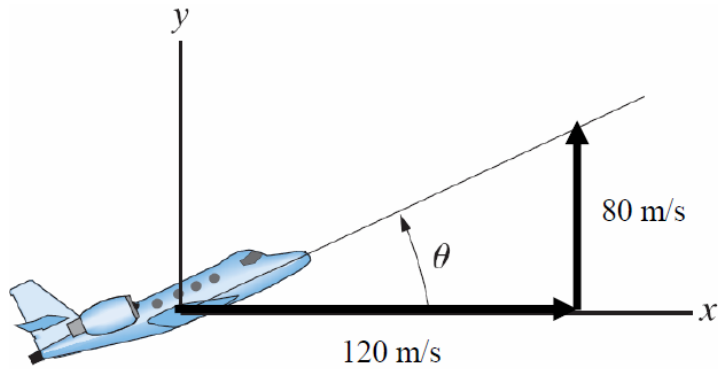


4. What is the plane's velocity in component form?

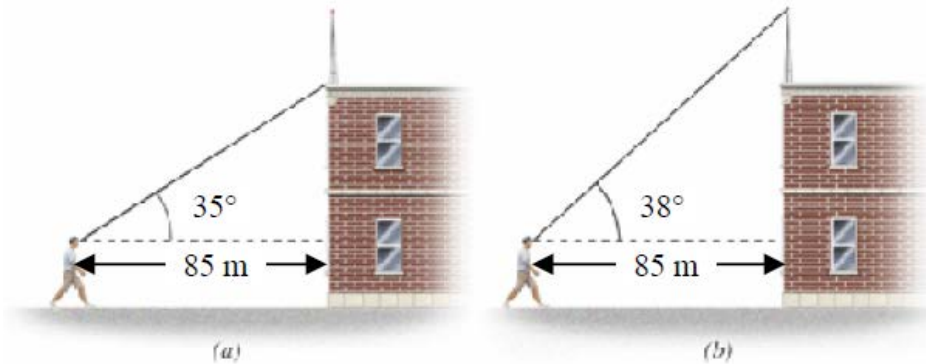


5. A hiker travels 16km North and 12km West. What is the magnitude and direction of the hiker's displacement?
6. The bank is 30km South and 9km West of the school. If a bird flies directly from the school to the bank, what is the magnitude and direction of its displacement vector?

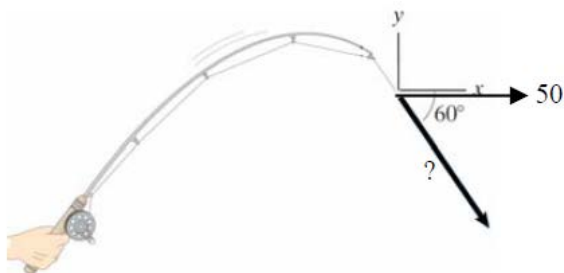
7. How fast is this plane traveling? (What is the magnitude of the plane's velocity?) What is the angle θ ?



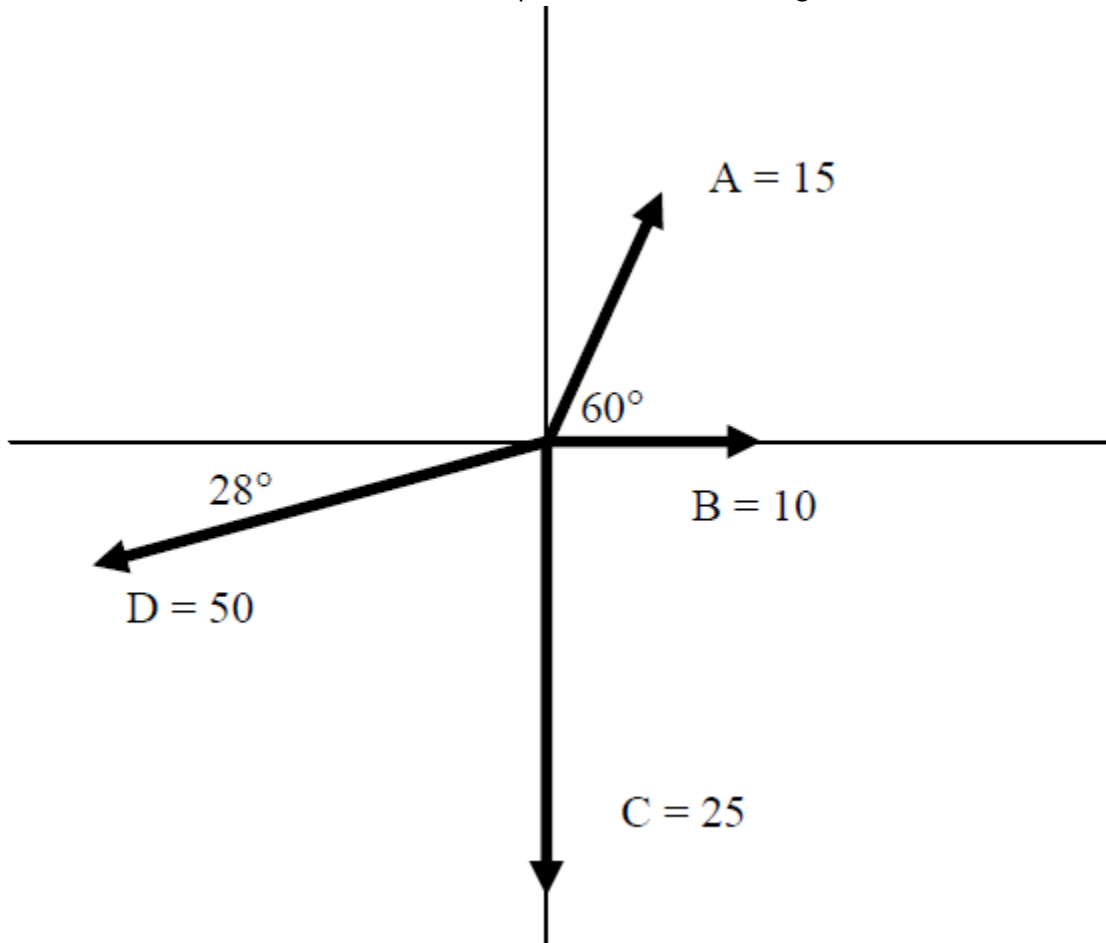
8. How high above the person's head is the roof? The antenna?



9. If the X component of the force on the fishing line shown below is equal to 50 Newtons, find the magnitude of the force



10. Fill in the chart below with the X and Y components of the following vectors:



	X	Y
A		
B		
C		
D		

11. Find the resultant vector in magnitude and direction form of the following:
(use vectors A B C D from the previous page)

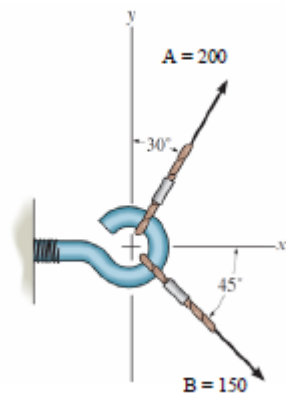
a. $A + B + C + D$

b. $A - C$

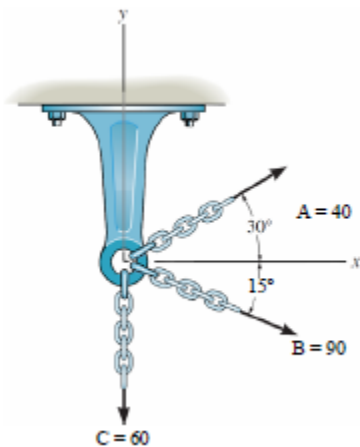
c. $D + (A - C)$

d. $B - A + C$

12. Determine $A + B$ for the scenario below:



13. Determine $A + B + C$ for the scenario below:



14. A cannon is placed on a train traveling at 17m/s E. The cannon is fired, launching a cannonball at 50m/s W relative to the cannon. What is the resultant velocity of the cannonball to a viewer on the ground?

15. A plane flies at a rate of 600km/hr E into a sustained wind of 10km/hr W. What is the resultant velocity of the plane? How far will it go in 3 hrs?

16. A pitcher can throw a ball at a velocity of 125 km/h straight ahead. If he throws the ball straight when a cross-wind is blowing at 28 km/h to the left, what will the magnitude of the ball's resultant velocity be? By what angle will the direction of the ball be off?

17. A cyclist heads out on a straight road at 25m/s with a bearing of 30° north of east. A wind headed directly south west is blowing at 10 m/s . What is the resultant velocity of the cyclist? (mag and dir)

18. A boat crosses a 50m river with a velocity of 0.5m/s. The current of the river is 0.1 m/s downstream. How far downstream will the boat land from where it started?
19. A triathlete swims across a river with a velocity of 1.7m/s. The river has a current of 0.1m/s downstream and she lands 10m downstream from where she started. What is the width of the river?
20. You are rowing a boat eastward across a river at 4m/s. The current pushed you downstream at a rate of 1.8m/s. If the river is 100m wide, how far downstream from where you started do you land?
21. (3pts) A pilot flies at 500km/hr due north when she encounters a steady gust of wind. After flying 250km North, the plane is 30km West of where it intended to be. What was the velocity of the wind?
22. A plane flies 250km/hr due north with a crosswind of 20km/hr W. What angle must it take (relative to due north) to continue flying due north? What is the magnitude of the resultant velocity?
23. A captain drives a boat with a maximum speed of 30km/hr W directly across a body of water with a current downstream of 7km/hr. At what angle has the captain positioned the boat to maintain his direction due W? What is the resultant velocity of the boat?